

Standard: #3-4

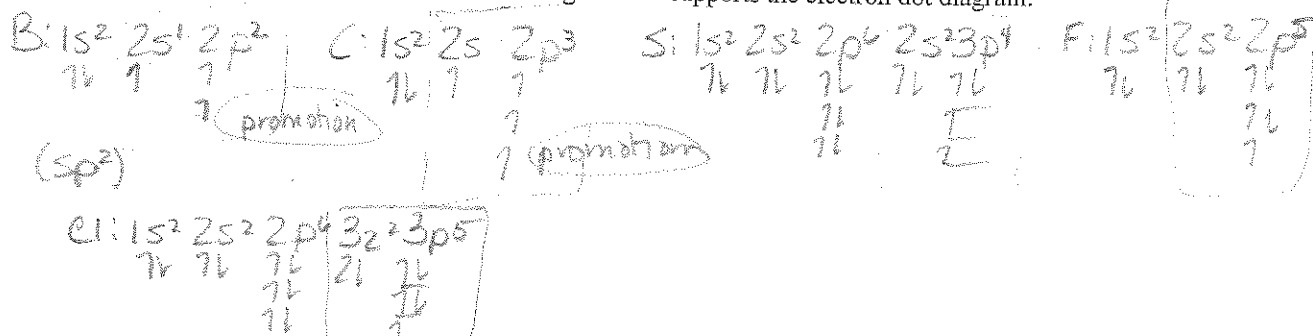
LEWIS DOT DIAGRAMS II

DRAW THE COMPLETE LEWIS DIAGRAMS BELOW INCLUDING RESONANCE STRUCTURES


1. Draw the electron dot models for these atoms.




2. For each atom above draw the orbital diagram that supports the electron dot diagram.



3. How many times do you think each atom will bond based upon the models provided.



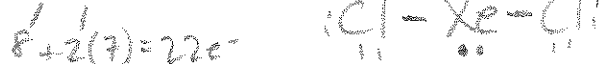
4. Ammonium



5. N_2



6. XeCl_2



7. Hydronium

